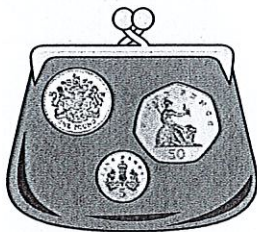
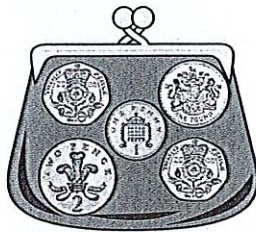


Counting coins

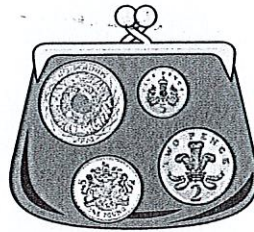
Write the amount in each purse.




1



2

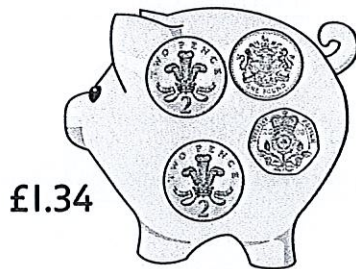


3

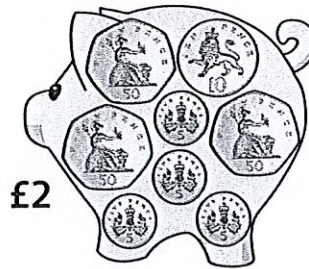


4

Write the coin that is missing from each box.



5



6

Choose two amounts and add them using partitioning.

Write the total. Do this three times.



7

8

9

Make 200 challenge!

How quickly can you do it?

10 Tracey knows three numbers that add to make 200. One is a multiple of ten. What are they?

11 Explain your thinking to a grown up.

I found this:



Easy



Challenging



I needed help